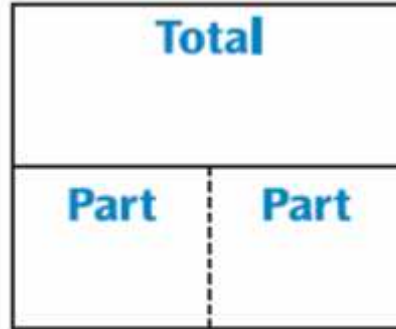
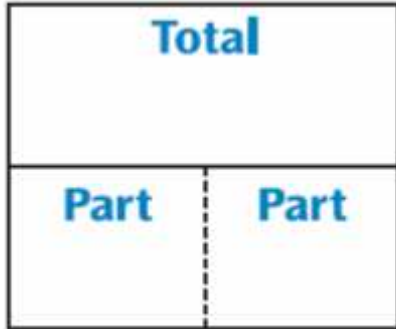



Domino Addition

Write 3 numbers for each domino.

Then write a number model for each domino.



_____ + _____ = _____

_____ + _____ = _____

Use the parts-and-total diagram to find the winning domino in Domino Top-It.

