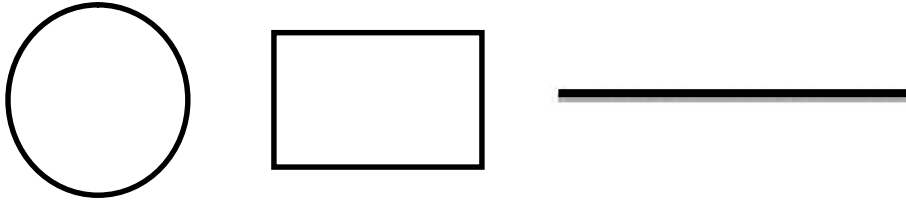


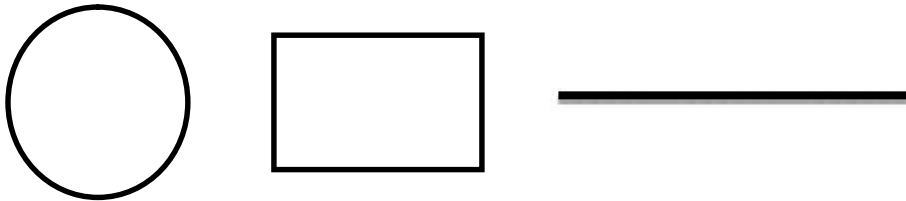
**Constructing the Whole**

1. Show me halves



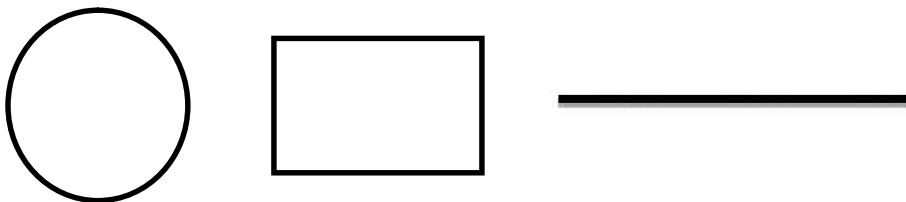
How many one-half pieces make up a whole? \_\_\_\_\_ So the whole is \_\_\_\_\_

2. Show me thirds



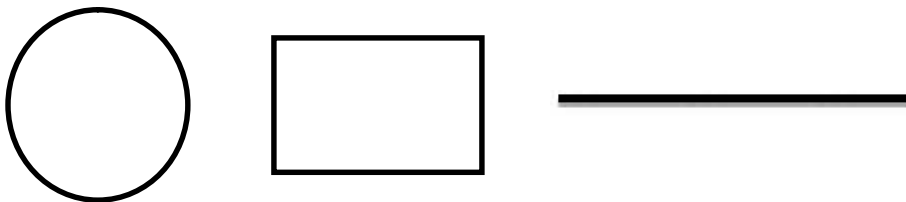
How many one-third pieces make up a whole? \_\_\_\_\_ So the whole is \_\_\_\_\_

3. Show me fourths



How many one-fourth pieces make up a whole? \_\_\_\_\_ So the whole is \_\_\_\_\_

4. Show me sixths



How many one-sixth pieces make up a whole? \_\_\_\_\_ So the whole is \_\_\_\_\_