


Pattern Block Fractions


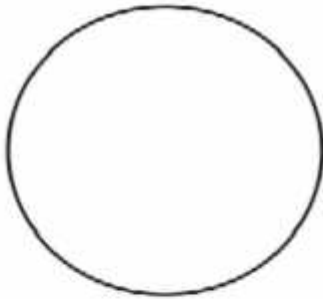


Use a straightedge to help you. A unit fraction has a numerator of 1.

1. Divide the hexagon into halves. Label each part with a unit fraction.



2. Divide the circle into fourths. Label each part with a unit fraction.



3. Divide the hexagon into sixths. Label each part with a unit fraction.

