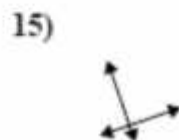
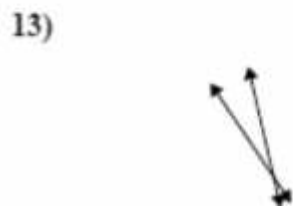
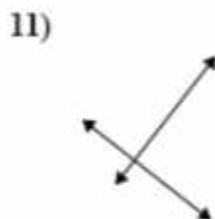
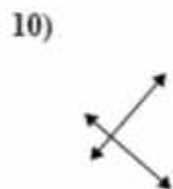
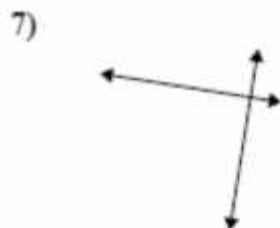
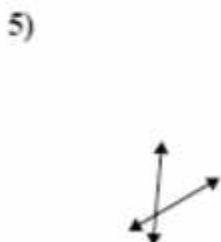
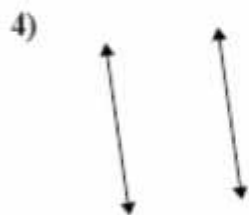
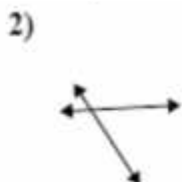
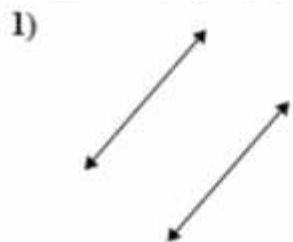


Parallel, Perpendicular, and Intersecting Lines

Identify each of the lines as parallel, perpendicular, or intersecting. Use the answer column to record your answers.



Answers

1. _____

2. _____

3. _____

4. _____

5. _____

6. _____

7. _____

8. _____

9. _____

10. _____

11. _____

12. _____

13. _____

14. _____

15. _____