

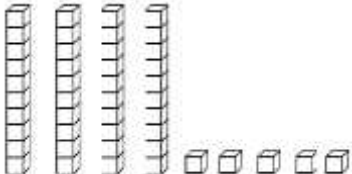
Family Note

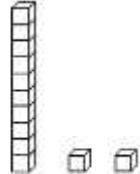
As children continue to work with Base-10 blocks, it is important that students realize the long is worth 10 and the cubes are worth 1. Instruct your child as they count the blocks they begin with the 10s and move into the 1s.

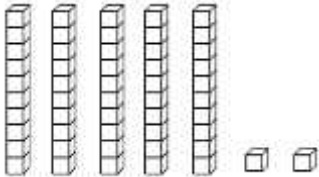
Please return this Home Link to school tomorrow.

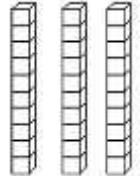
Write the number for each set of Base-10 blocks.

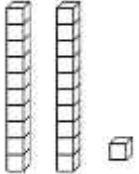
Example:  23

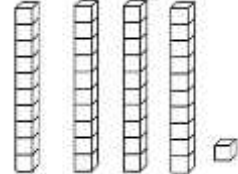
1.  _____

4.  _____

2.  _____

5.  _____

3.  _____

6.  _____