

Name \_\_\_\_\_

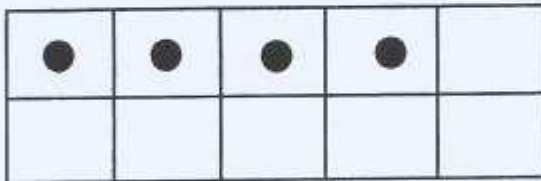
Write how many counters on each frame. Draw the counters in red to show how many more to make 10.



How many? \_\_\_\_\_

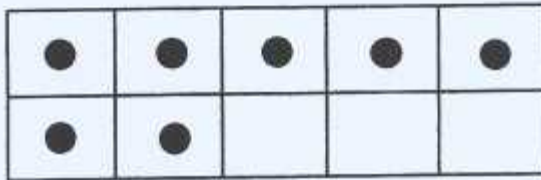
How many more did you need to make 10?

\_\_\_\_\_




How many? \_\_\_\_\_

\_\_\_\_\_



How many? \_\_\_\_\_

\_\_\_\_\_



How many? \_\_\_\_\_

\_\_\_\_\_



How many? \_\_\_\_\_

\_\_\_\_\_