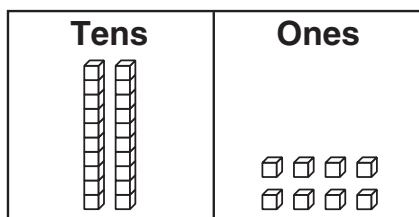


Tens-and-Ones Riddles

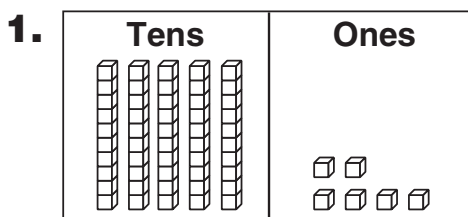
**Family Note**

We have begun to work on place value using base-10 blocks. The blocks shown in the tens columns are called *longs* and the blocks shown in the ones columns are called *cubes*. It takes 10 cubes to make 1 long. On this page, your child is writing numbers shown with longs and cubes.

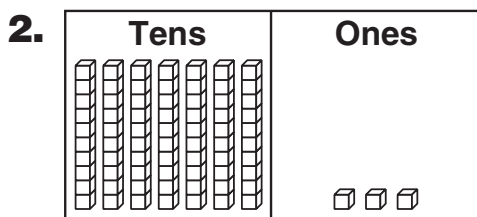
Please return this Home Link to school tomorrow.

Example:

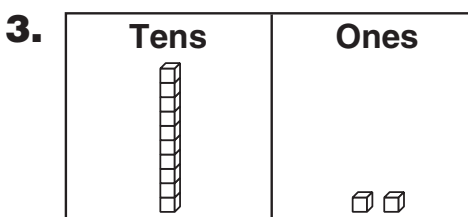
What number am I? 28



What number am I? _____



What number am I? _____



What number am I? _____

Practice

4. Fill in the missing numbers.

| Rule |
|-------------------|
| Count back by 10s |

