

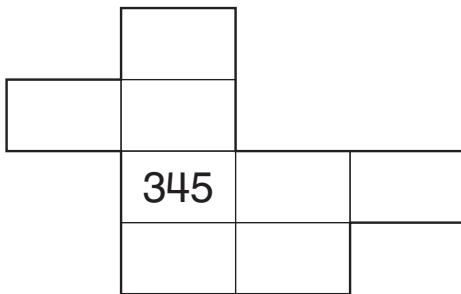
More Number-Grid Puzzles

Family Note Today we reviewed place value for 2-digit numbers such as 35, 3-digit numbers such as 827, and 4-digit numbers such as 1,254. We also completed number-grid puzzles for 3-digit numbers. Ask your child to explain how he or she solved each problem below.

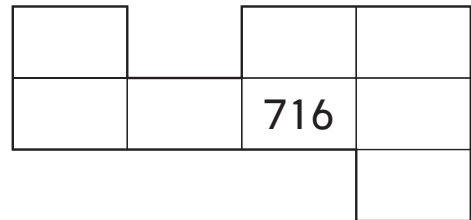
Please return this Home Link to school tomorrow.

Fill in the missing numbers.

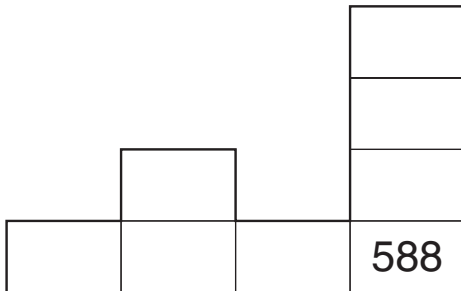
1.



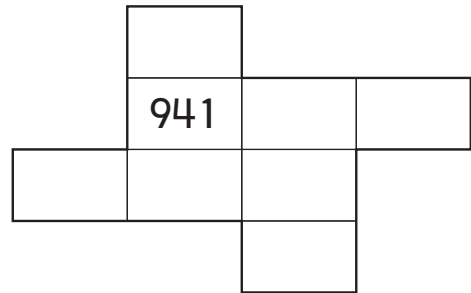
2.



3.



4.



Practice

Solve.

5. $4 + \underline{\quad} = 8$ 6. $10 = 6 + \underline{\quad}$ 7. $\underline{\quad} = 8 - 1$