

Home Link
3-4

Domino Facts

**Family Note**

Today we learned that addition problems and subtraction problems are related. For example, $5 + 3 = 8$ can be rewritten to show two related subtraction facts: $8 - 5 = 3$ and $8 - 3 = 5$.


Each domino shown below can be used to write 2 addition facts and 2 related subtraction facts.

Please return this Home Link to school tomorrow.




Write 2 addition facts and 2 subtraction facts for each domino.

1.




$$\begin{array}{r} 7 \\ + 3 \\ \hline 10 \end{array} \quad \begin{array}{r} 3 \\ + 7 \\ \hline 10 \end{array} \quad \begin{array}{r} 10 \\ - 3 \\ \hline 7 \end{array} \quad \begin{array}{r} 10 \\ - 7 \\ \hline 3 \end{array}$$

2.




$$\begin{array}{r} \square \\ + \square \\ \hline \end{array} \quad \begin{array}{r} \square \\ + \square \\ \hline \end{array} \quad \begin{array}{r} \square \\ - \square \\ \hline \end{array} \quad \begin{array}{r} \square \\ - \square \\ \hline \end{array}$$

3.



$$\begin{array}{r} \square \\ + \square \\ \hline \end{array} \quad \begin{array}{r} \square \\ + \square \\ \hline \end{array} \quad \begin{array}{r} \square \\ - \square \\ \hline \end{array} \quad \begin{array}{r} \square \\ - \square \\ \hline \end{array}$$

4.



$$\begin{array}{r} \square \\ + \square \\ \hline \end{array} \quad \begin{array}{r} \square \\ + \square \\ \hline \end{array} \quad \begin{array}{r} \square \\ - \square \\ \hline \end{array} \quad \begin{array}{r} \square \\ - \square \\ \hline \end{array}$$

Write the sums. Tell someone at home what you know about doubles-plus-1 and doubles-plus-2 facts.

5. $6 + 7 = \underline{\quad}$

6. $\underline{\quad} = 8 + 6$

7. $5 + 7 = \underline{\quad}$

8. $7 + 9 = \underline{\quad}$

Unit