




Home Link 10-4 Comparing Costs





Family Note Ask your child to explain how he or she solved the problems on this page. Encourage your child to act out the problems with coins or draw pictures of base-10 blocks.
Please return this Home Link to school tomorrow.



1. A  costs how much more than a ? _____¢

2. You buy a . You pay with .

How much change will you get? _____¢

3. You buy a  and .

How much will you pay in all? _____¢

You pay with \$1. How much change will you get? _____¢

Practice

4. Complete the number-grid puzzle.

