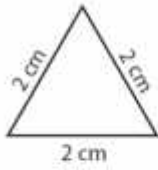


# 4-5 Homelink

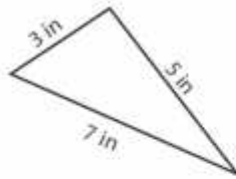
Name \_\_\_\_\_

Find the perimeter of each triangle.

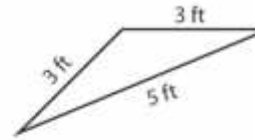
1)



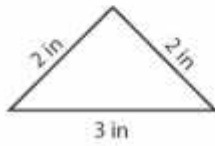
2)



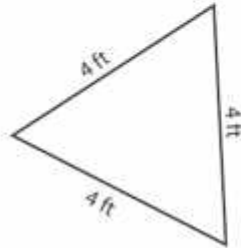
3)



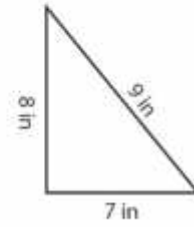
4)



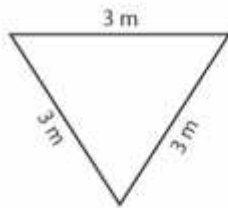
5)



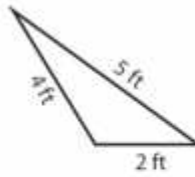
6)



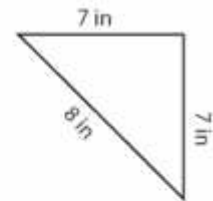
7)



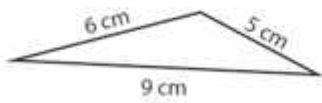
8)



9)



10)



11)



12)

