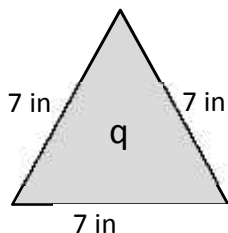


4-7 Home Link

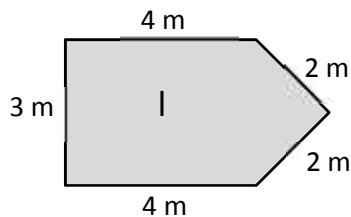
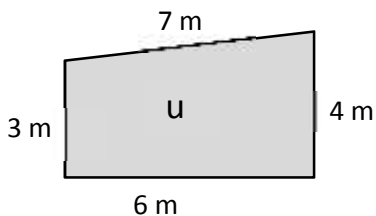
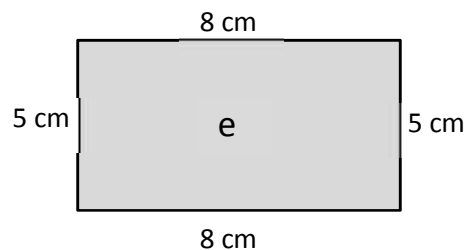
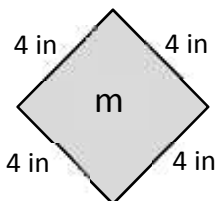
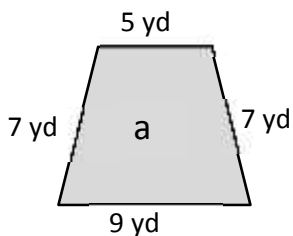
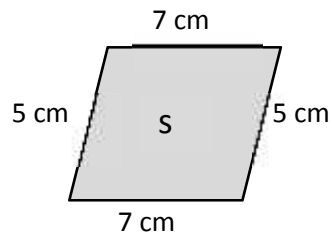
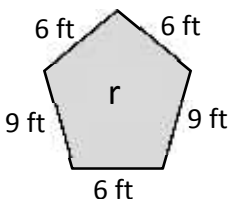
Name: _____ Date: _____

Find the perimeters of the shapes below including the units in your number sentences. Match the letter inside each shape to its perimeter to solve the riddle. The first one has been done for you.



$$P = 7 \text{ in} + 7 \text{ in} + 7 \text{ in}$$

$$P = 21 \text{ in}$$



What kind of meals do math teachers eat?

_____ !
 24 21 20 28 36 26 16 26 28 15 24

