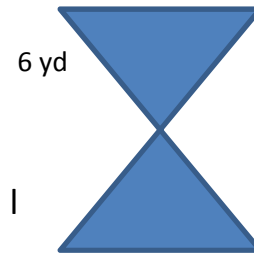
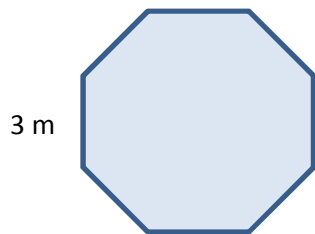
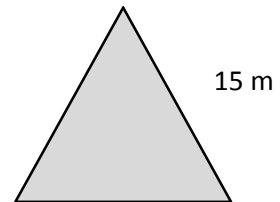
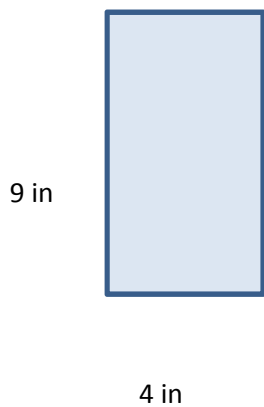
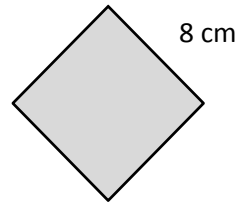
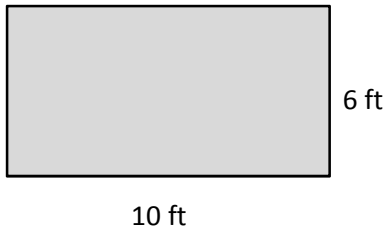


4-8 Home Link

Name: _____ Date: _____

Find the perimeters of the shapes below.



Jessie builds a picture frame that is 10 inches by 14 inches. How much wood will she need to complete the frame? Show a picture and solve.