




# 4-11 Home Link


Name: \_\_\_\_\_ Date: \_\_\_\_\_


**Calculate the area of each shape.**


(1)   
Area: \_\_\_\_\_


(2)   
Area: \_\_\_\_\_


(3)   
Area: \_\_\_\_\_


(4)   
Area: \_\_\_\_\_


(5)   
Area: \_\_\_\_\_


(6)   
Area: \_\_\_\_\_


(7)   
Area: \_\_\_\_\_

(8)   
Area: \_\_\_\_\_

(9)   
Area: \_\_\_\_\_

(10)   
Area: \_\_\_\_\_

(11)   
Area: \_\_\_\_\_

(12)   
Area: \_\_\_\_\_