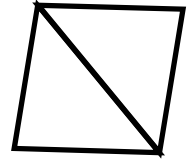

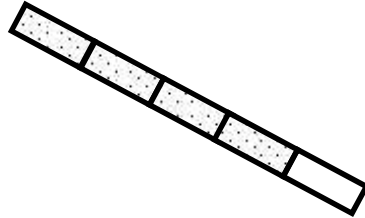
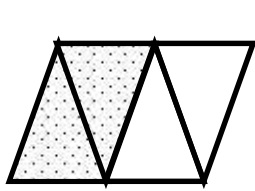


5-2 Home Link

1. Each shape is a whole divided into equal parts. Name the fractional unit and then count and tell how many of those units are shaded. The first one is done for you.



The unit is 1 fourth. _____

2 fourths are shaded _____

2



There are _____ equal parts in all. _____ are shaded.



There are _____ equal parts in all. _____ are shaded.



There are _____ equal parts in all. _____ are shaded.



There are _____ equal parts in all. _____ are shaded.

3. Dylan plans to eat $\frac{1}{6}$ of his hot dog. Show how much of his hot dog he plans to eat?