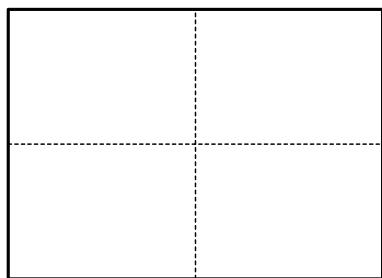


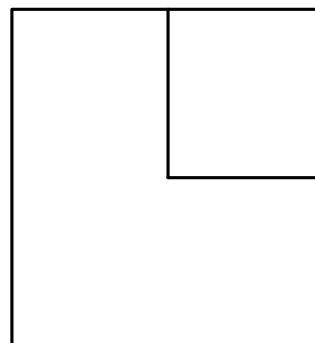
Name: _____ Date: _____ Time: _____

Solving Fractional Parts of a Region Problems

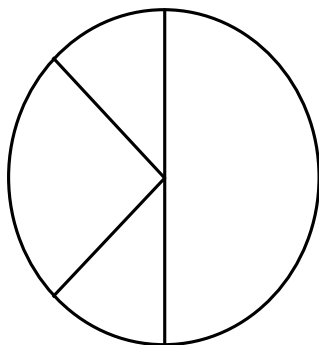
1. Label each part of the rectangle with a unit fraction.



2. The large square below represents ONE. Write a fraction that names each region inside the figure.



3. The circle below represents ONE. Write a fraction that names each region inside the figure.



4. The square below represents ONE. Write a fraction that names each region inside the figure.

