

# Fractions on a Number Line

6-4

Divide the number line into equal parts and label the fractions. Draw the fraction bars below the line.


thirds

$\frac{0}{3}$
---------------

—
3

—
3


$\frac{3}{3}$
---------------



sixths

--


--



halves

--

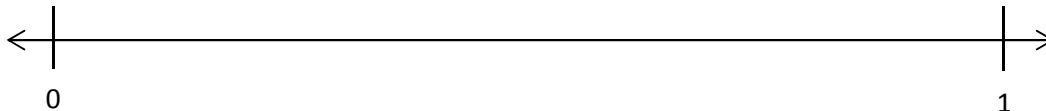
--



fourths

--

--



eighths

--

--

