

Home
Link
6-6

Many Names for Fractions



Write the letters of the pictures that represent each fraction.


1. $\frac{1}{2}$ C, _____

2. $\frac{3}{4}$ _____

3. $\frac{4}{5}$ _____

4. $\frac{2}{3}$ _____

A




B



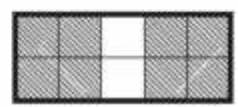
C



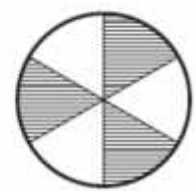
D



E



F



G



H



I

