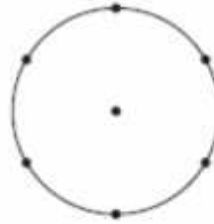
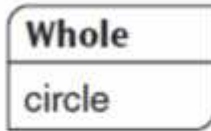



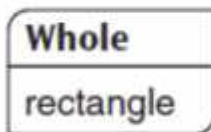
Study Link
 4-5

Review Fractional Concepts

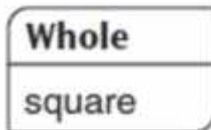

1. Divide the circle into 6 equal parts.
Color $\frac{5}{6}$ of the circle.



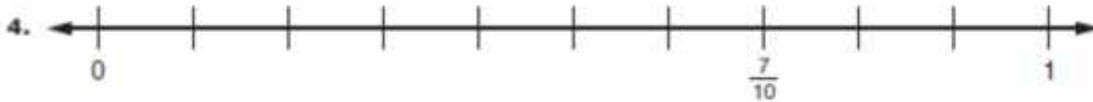
2. Divide the rectangle into 3 equal parts.
Shade $\frac{2}{3}$ of the rectangle.



3. Divide each square into fourths.
Color $1\frac{3}{4}$ of the squares.



Fill in the missing fractions and mixed numbers on the number lines.


Practice

6. $854 + 267 =$ _____

7. _____ $= 3,398 + 2,635$

8. _____ $= 6,374 - 755$

9. $5,947 - 3,972 =$ _____