


Identifying Points, Line Segments, and Angles

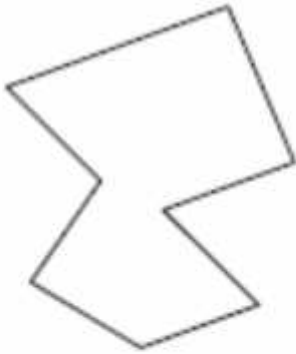
On each of the polygons below:

- Circle each line segments that makes up the polygon
- Put a star on each point in the polygon
- Draw an arch at each angle

Example:



1)



2)



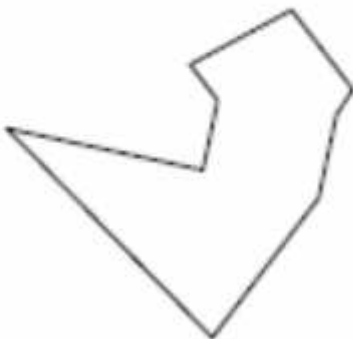
3)



4)



5)



6)

