


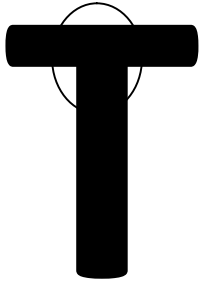
Perpendicular Line Segments

Draw a circle around the vertex of each perpendicular line segments in the following letters. Some of the letters will have more than one perpendicular line segment.

1.

2.

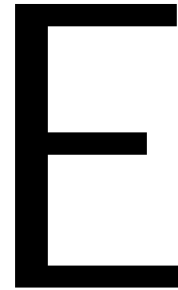
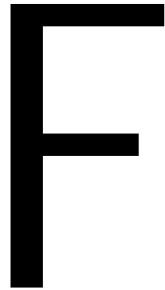
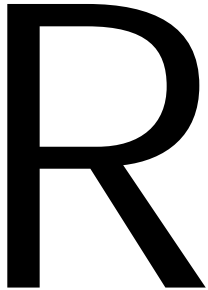
Example



3.

4.

5.



6.

7.

8.

