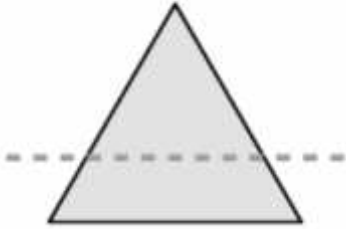


Triangle Symmetry and Identification

Look at each triangle below. On first line identify if the line of symmetry is placed correctly; write yes or no. On the second line write what type of triangle it is; use the word equilateral, isosceles, or scalene.

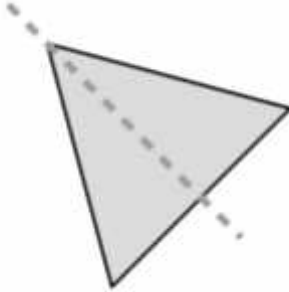
Ex.



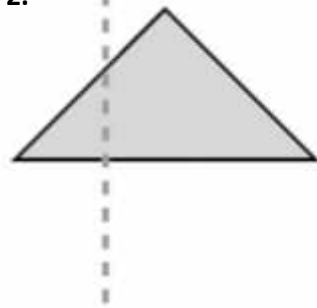
No

Equilateral

1.



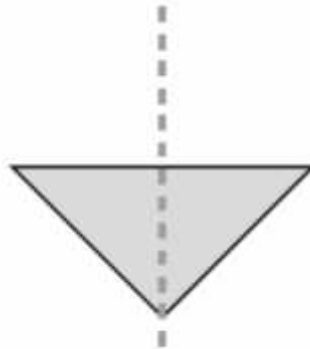
2.



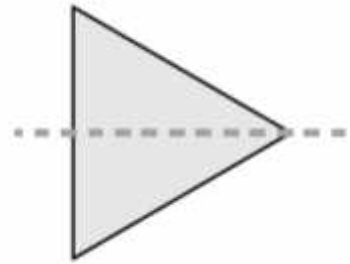
3.



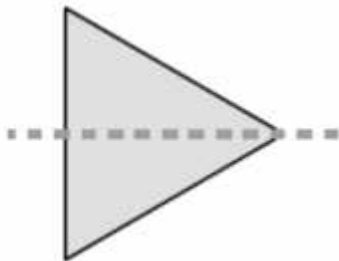
4.



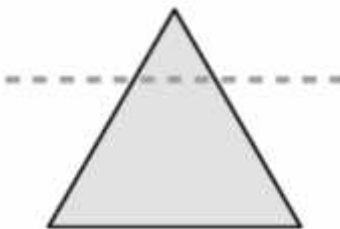
5.



6.



7.



8.

