

Angles in Polygons

Count the number of Acute, Obtuse and Right and Reflex angles in each shape.

Ex)



1)



2)



Answers

A O R X

Ex. 1 2 1 0

1. _____

2. _____

3. _____

4. _____

5. _____

6. _____

7. _____

8. _____

9. _____

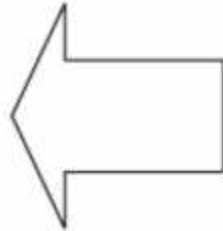
10. _____

11. _____

3)




4)



5)




6)



7)



8)



9)



10)



11)

