

Name \_\_\_\_\_

Date \_\_\_\_\_

Time \_\_\_\_\_


Study Link

7-8

# Fraction, Decimal, and Percent Grids




Fill in the missing numbers. Shade the grids.



Fraction  $\frac{3}{4} = \frac{\square}{100}$

Decimal: \_\_\_\_\_


Percent: \_\_\_\_\_%



Fraction  $\frac{7}{10} = \frac{\square}{100}$

Decimal: \_\_\_\_\_


Percent: \_\_\_\_\_%



Fraction  $\frac{4}{5} = \frac{\square}{100}$

Decimal: \_\_\_\_\_

Percent: \_\_\_\_\_%



Fraction  $\frac{1}{2} = \frac{\square}{100}$

Decimal: \_\_\_\_\_

Percent: \_\_\_\_\_%