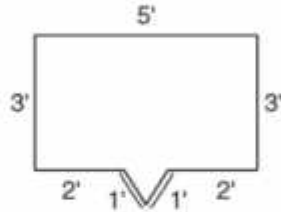
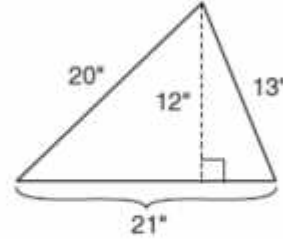


Study Link
8-5**Perimeter**

1. Perimeter = _____ feet




2. Perimeter = _____ inches



3. Draw a rectangle
- BLUE*
- whose perimeter is 16 centimeters. Label the length of the sides.

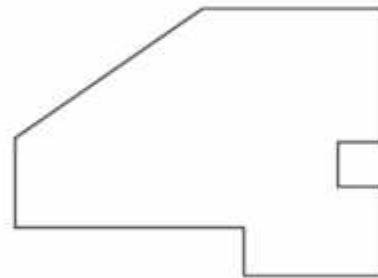
4. Draw a different rectangle
- FARM*
- whose perimeter is also 16 centimeters. Label the length of its sides.

5. Measure the sides of the figure to the nearest centimeter. Label the length of its sides. Find its perimeter.



Perimeter = _____ centimeters

6. Measure the sides of the figure to the nearest
- $\frac{1}{4}$
- inch. Label the length of its sides. Find its perimeter.



Perimeter = _____ inches

Practice

7. $\frac{1}{4}$ of 24 = _____

8. _____ = $\frac{2}{3}$ of 24

9. _____ = $\frac{5}{8}$ of 40